


Greg Tang's Summer Math Fun!

Summertime!

Play Ten Frame Mania	Play Numskill 2-set (easy level)	Complete Tangy Tuesday Puzzle Pack	Play NumTanga Jr.
Play Numskill 1-set (easy level)	Play Place Value 2-place (easy level)	Play How Much How Many	Play Kakooma + (practice, 4 number sun)
Play BreakApart (+) Doubles (easy level)	Read Math Fables with Mom or Dad	Play Math Limbo (Learn Mode)	



Go to level 2!



- Find games and activities at www.GregTangMath.com
- Play each game for 15 minutes
- Try to complete each level with no errors
- Play the harder levels if activities are too easy
- Move to the previous game board if you get stuck
- Get help from an adult or family member
- Sign up to win prizes for each level you complete

Level 1 Game Board
www.GregTangMath.com

TANGY TUESDAY PUZZLE PACK

Fun brain puzzles that make you smarter!

The collage features several math puzzles:

- Numskill™**: A grid puzzle titled "ADDITION" where students look for addition problems in each box.
- NumTanga™**: A puzzle titled "NUMBERS TO 20" with a grid of numbers and corresponding ten-frame representations (e.g., 6, 7, 15, 3, 6, 6, 15, 3, 4).
- DigiCross™**: A crossword puzzle titled "3RD GRADE" with words like "greater", "width", "rhombus", "perimeter", "ninety", "area", "twelve", "sixty", "tens", and "thirds".
- Takooma®**: A puzzle titled "3 PLUS" with a grid of numbers and operations (e.g., +24, -27, +16, +4, +47, +9, -67, 13, -23).


Math Centers
Teaching Activities
Homework
Early Finishers
Fun Reward Games

Created by

GREG TANG MATH

store.gregtangmath.com

**GRADE
K**



two

little

greater

seven

ten

corners

six

three

ACROSS

2. 1 more than 1

4. $5 + 5$

5. 2 is ___ than 0

6. three plus ___ makes ten

DOWN

1. a square has 4 ___

3. the opposite of big

4. 3

6. ___, 7, 8, 9, 10

Snake

K.1.10

Name: _____

Licensed to:

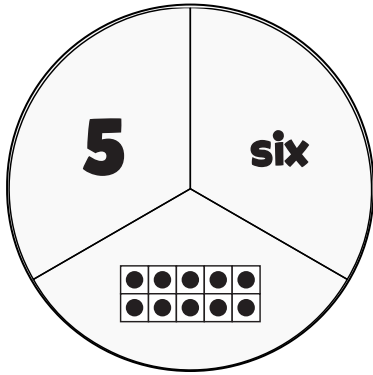
store.gregtangmath.com © 2016 Gregory Tang

Fill in each blank box in order, combining the numbers from the previous two boxes.

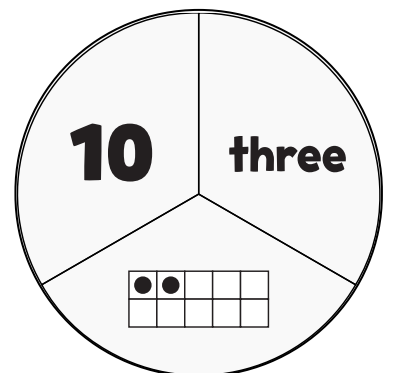
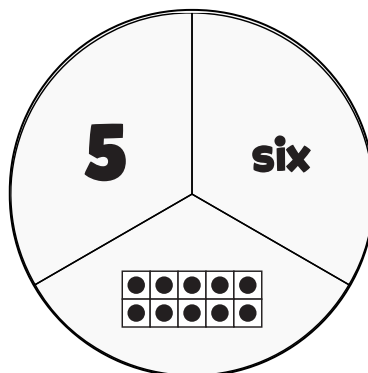
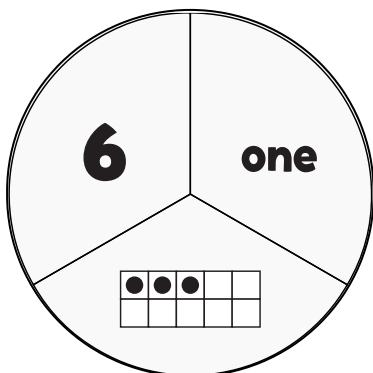
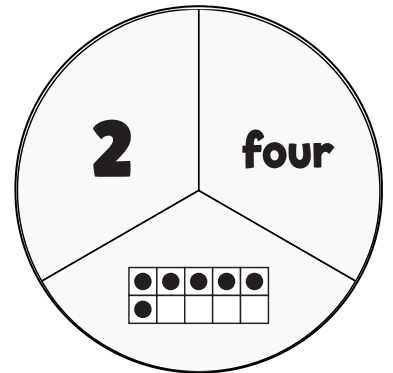
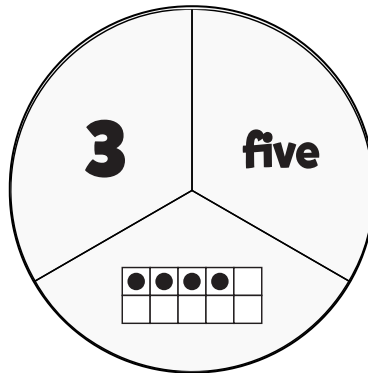
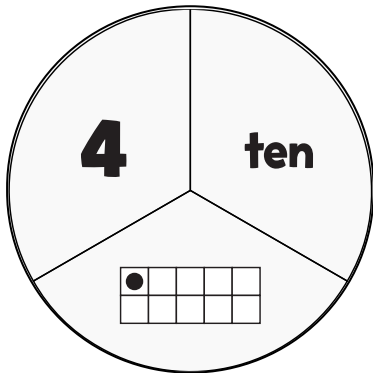
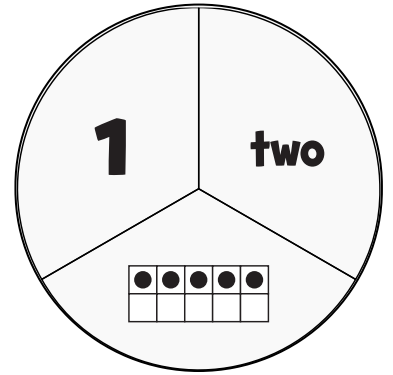
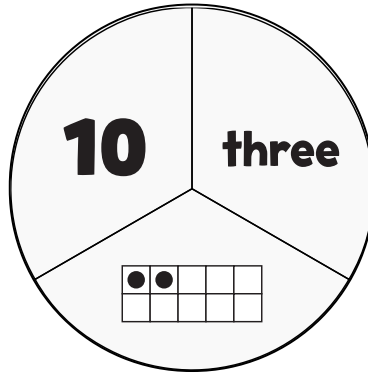
5			-1		-1		
-4		+1				+4	
+3		-2				3	-2

4	-2		-1		+4	
						-2
2						
-1		-1		+3		-2

In each empty box, write the matching value between adjacent cards.



10



Kakooma[®] Plus

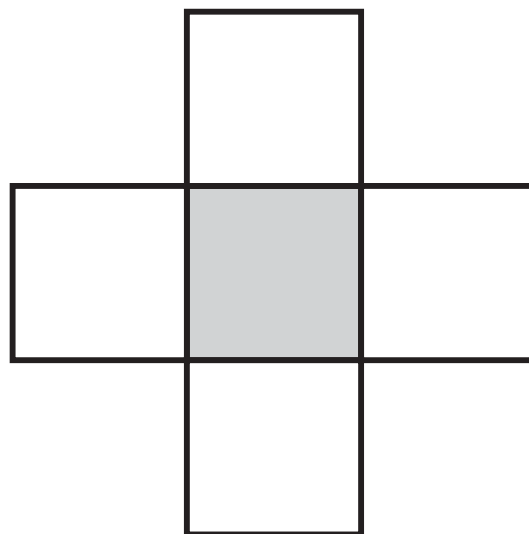
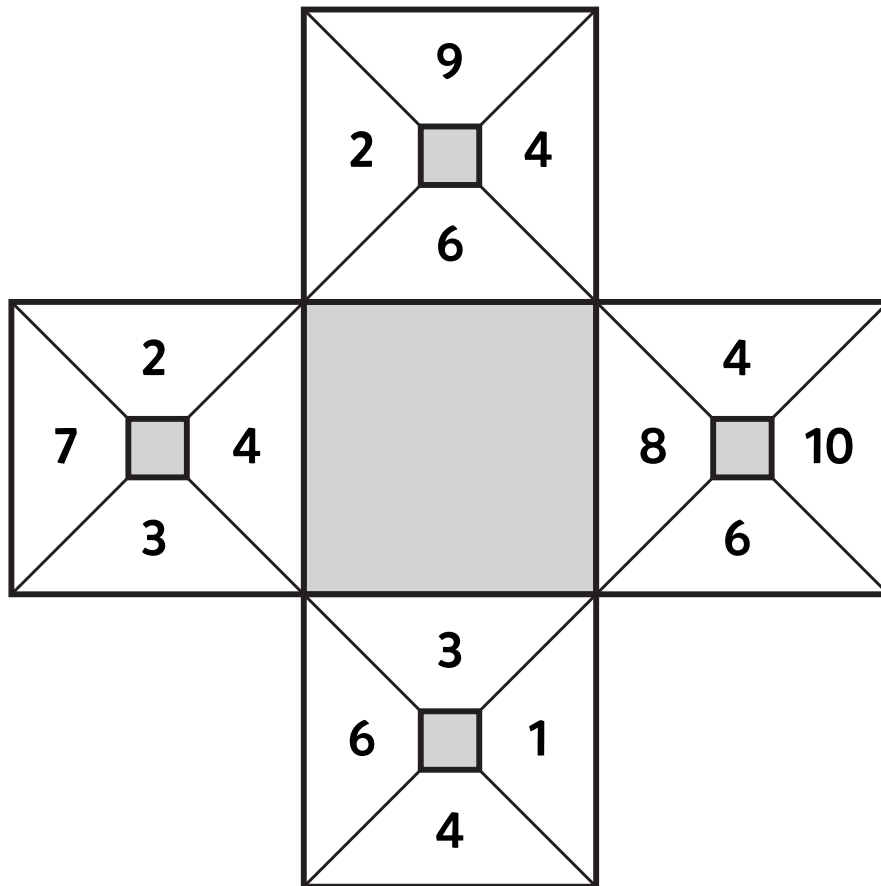
K.1.10

Name: _____


Licensed to:

store.gregtangmath.com © 2016 Gregory Tang

Puzzled? In each 4-number square, find the number that is the sum of 2 other numbers. Use all 4 sums to create 1 final puzzle and solve.



Final
answer:



Fill in the empty boxes to make every horizontal and vertical equation correct. Use the correct order of operations and read left to right and top to bottom. Use every number in the number bank once.

NUMBER BANK

1

2

3

4

5

	-	3	=	
-		+		+
4	-		=	
=		=		=
1	+		=	5